



**THIRD SPACE  
LEARNING**

# Triangular Prism Worksheet

**Geometry**

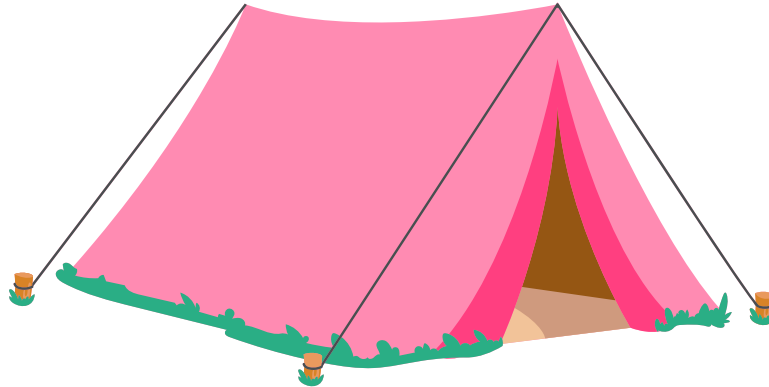
**Grades 1 to 3**

## Questions

Name: .....

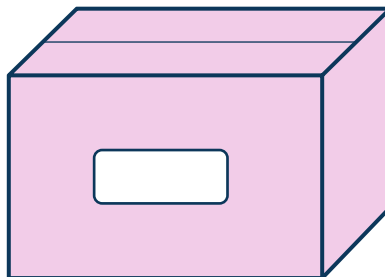
Date: .....

- 1 Look at the shape below. Is it a triangular prism?




Answer

- 2 Look at the shape below. Is it a triangular prism?



Answer


- 3 Is the shape below a triangular prism?



Answer

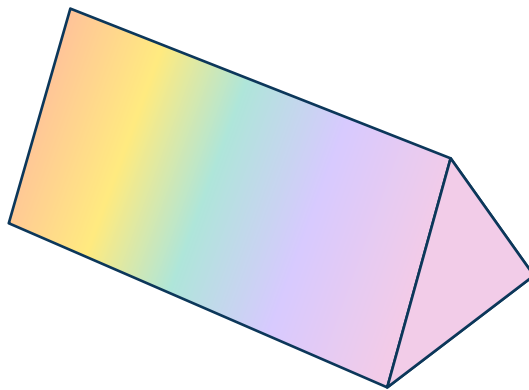
## Triangular Prism Worksheet | Grades 1 to 3

- 4 Look at the shape below. Is it a triangular prism?




Answer

- 5 Is this shape a triangular prism?



Answer

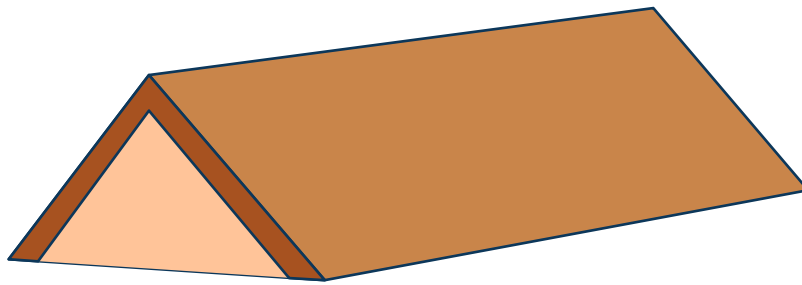
- 6 Look at the shape below. Is it a triangular prism?



Answer

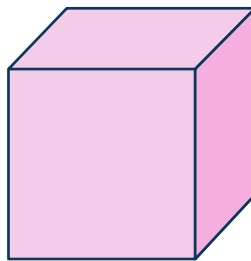
## Triangular Prism Worksheet | Grades 1 to 3

7 Look at the shape below. Is it a triangular prism?



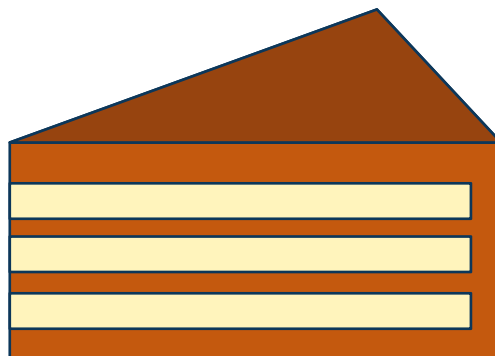
Answer

8 Is this a triangular prism?



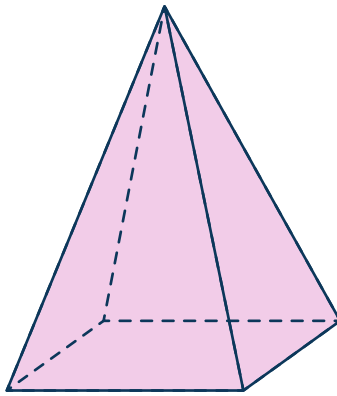
Answer

9 Look at the shape below. Is it a triangular prism?



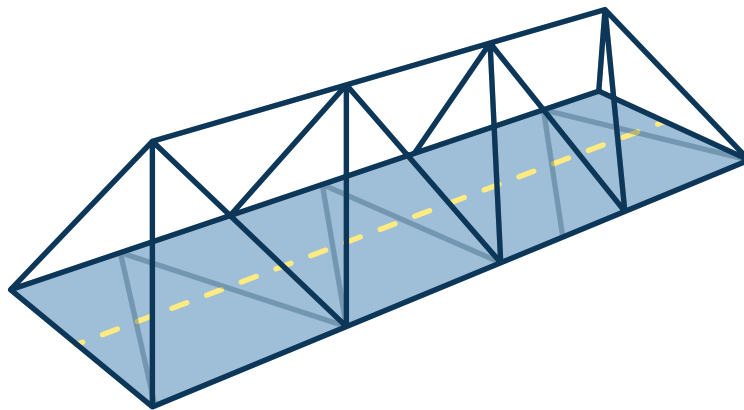
Answer

10 Is this shape a triangular prism?




Answer

11 Look at the shape below. Is it a triangular prism?



Answer


12 Is the shape below a triangular prism?



Answer

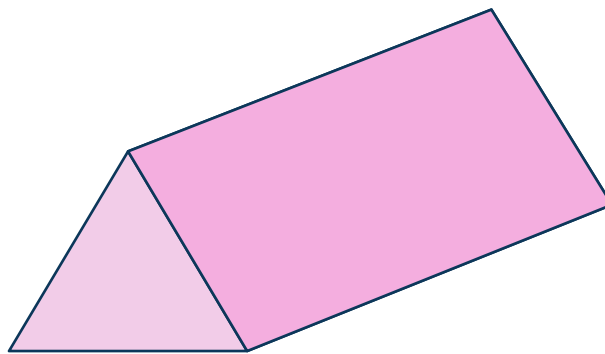
## Triangular Prism Worksheet | Grades 1 to 3

- 13 Look at the shape below. Is it a triangular prism?



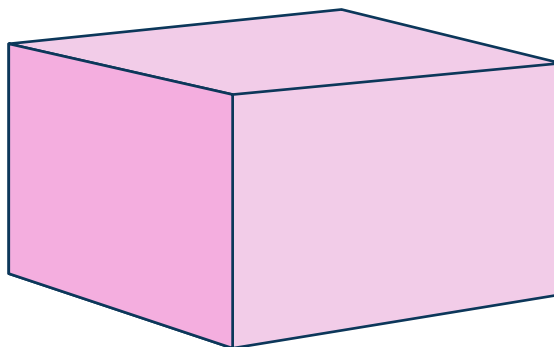
Answer

- 14 Is this a triangular prism?



Answer

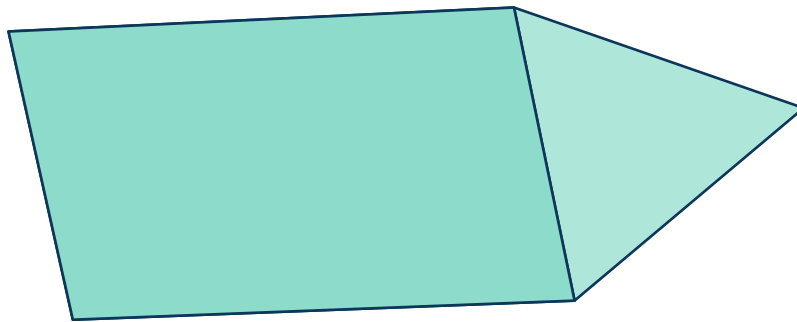
- 15 Look at the shape below. Is it a triangular prism?



Answer

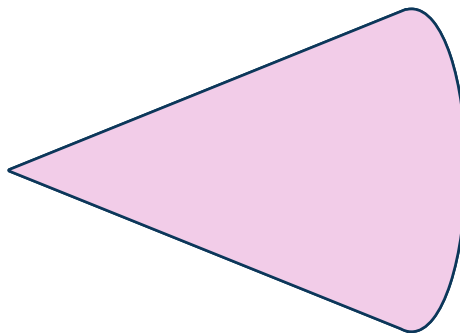
## Triangular Prism Worksheet | Grades 1 to 3

16 Is this shape a triangular prism?



Answer

17 Look at the shape below. Is it a triangular prism?



Answer


18 Look at the shape below. Is it a triangular prism?



Answer

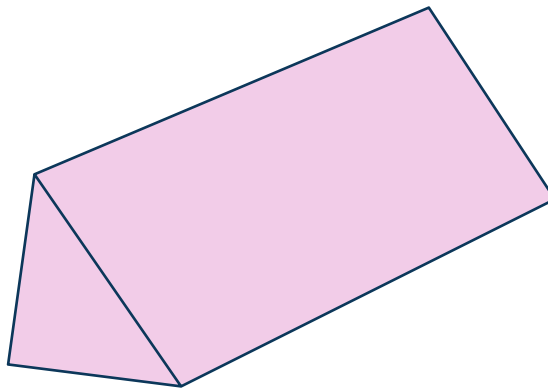
## Triangular Prism Worksheet | Grades 1 to 3

19 Is this a triangular prism?



Answer

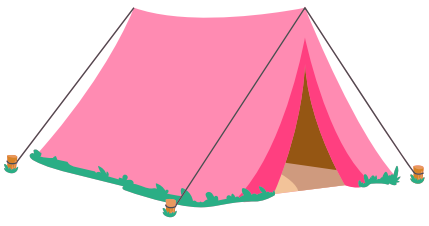
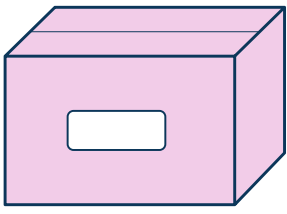


20 Look at the shape below. Is it a triangular prism?



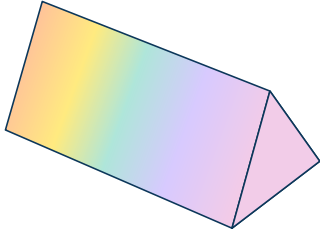
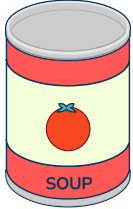
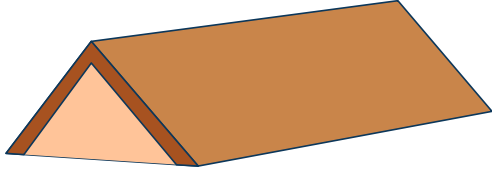
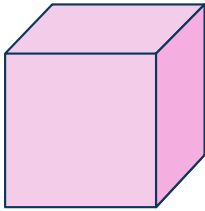

Answer



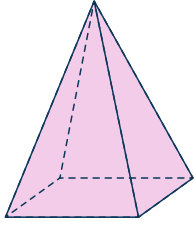
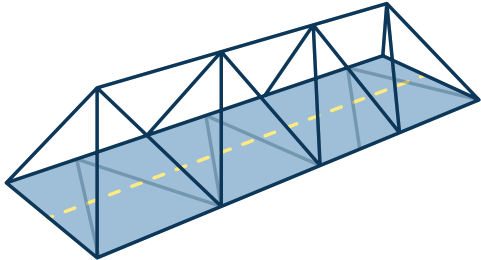
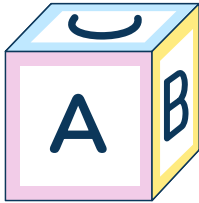

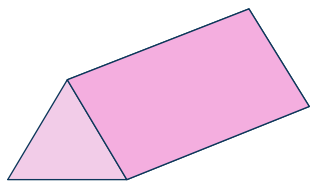
# Answers

Question number	Question	Answers	Standard
1	<p>Look at the shape below. Is it a triangular prism?</p> 	Yes, it is a triangular prism	1.G.A.2
2	<p>Look at the shape below. Is it a triangular prism?</p> 	No, it is not a triangular prism	1.G.A.2
3	<p>Is the shape below a triangular prism?</p> 	No, it is not a triangular prism	1.G.A.2
4	<p>Look at the shape below. Is it a triangular prism?</p> 	No, it is not a triangular prism	1.G.A.2

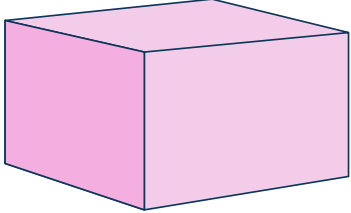
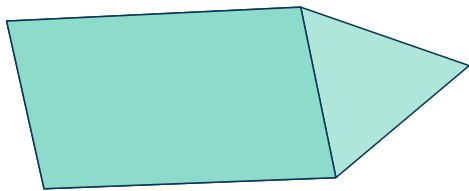
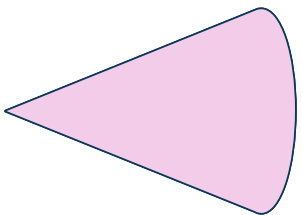

## Triangular Prism Worksheet | Grades 1 to 3 | Answers

Question number	Question	Answers	Standard
5	Is this shape a triangular prism? 	Yes, it is a triangular prism	1.G.A.2
6	Look at the shape below. Is it a triangular prism? 	No, it is not a triangular prism	1.G.A.2
7	Look at the shape below. Is it a triangular prism? 	Yes, it is a triangular prism	1.G.A.2
8	Is this a triangular prism? 	No, it is not a triangular prism	1.G.A.2
9	Look at the shape below. Is it a triangular prism? 	No, it is not a triangular prism	1.G.A.2


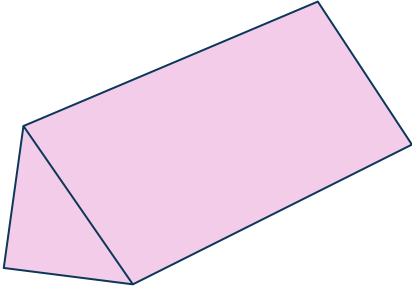
## Triangular Prism Worksheet | Grades 1 to 3 | Answers

Question number	Question	Answers	Standard
10	Is this shape a triangular prism? 	No, it is not a triangular prism	1.G.A.2
11	Look at the shape below. Is it a triangular prism? 	Yes, it is a triangular prism	1.G.A.2
12	Is the shape below a triangular prism? 	No, it is not a triangular prism	1.G.A.2
13	Look at the shape below. Is it a triangular prism? 	No, it is not a triangular prism	1.G.A.2
14	Is this a triangular prism? 	Yes, it is a triangular prism	1.G.A.2

## Triangular Prism Worksheet | Grades 1 to 3 | Answers

Question number	Question	Answers	Standard
15	<p>Look at the shape below. Is it a triangular prism?</p> 	No, it is not a triangular prism	1.G.A.2
16	<p>Is this shape a triangular prism?</p> 	Yes, it is a triangular prism	1.G.A.2
17	<p>Look at the shape below. Is it a triangular prism?</p> 	No, it is not a triangular prism	1.G.A.2
18	<p>Look at the shape below. Is it a triangular prism?</p> 	Yes, it is a triangular prism	1.G.A.2

## Triangular Prism Worksheet | Grades 1 to 3 | Answers




Question number	Question	Answers	Standard
19	<p>Is this a triangular prism?</p> 	No, it is not a triangular prism	Answer
20	<p>Look at the shape below. Is it a triangular prism?</p> 	Yes, it is a triangular prism	Answer

## Do you have a group of students who need a boost in math?

Each student could receive a personalized lesson every week from our specialist one-on-one math tutors.

- ✓ Differentiated instruction for each student
- ✓ Aligned to your state's standard
- ✓ Scaffolded learning to close gaps

## Speak to us

-  [thirdspacelearning.com/us/](https://thirdspacelearning.com/us/)
-  (929) 298-4593
-  [hello@thirdspacelearning.com](mailto:hello@thirdspacelearning.com)



**THIRD SPACE**  
LEARNING